


Name _____

Similar Figures

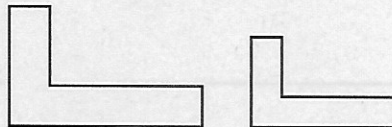
R 8-8

Similar figures are figures that have the same shape. The figures may or may not have the same size.

These triangles are about the same size, but they do not have the same shape. The triangles are NOT similar.




These shapes are similar. They have the same shape but are not the same size.

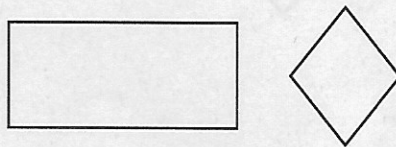


Do the figures in each pair appear to be similar? If so, are they also congruent?

1.



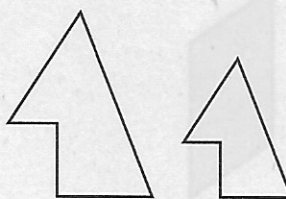
2.




3.



4.



5.



6.

